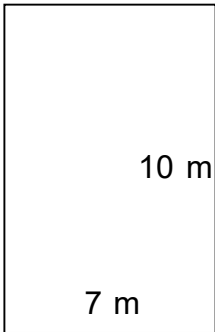


Name: \_\_\_\_\_

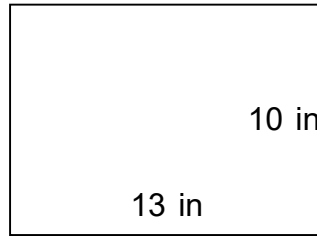
# Area of Squares and Rectangles

Find the area of the squares and rectangles. Answer using the correct units.

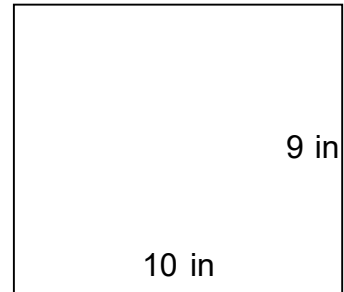
1.



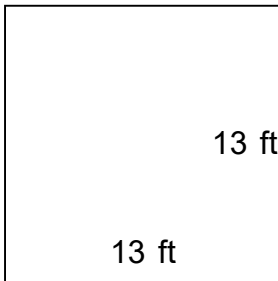
2.



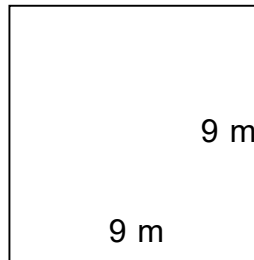
3.



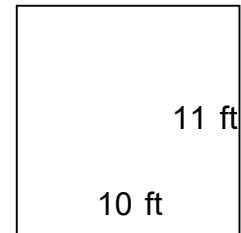
4.



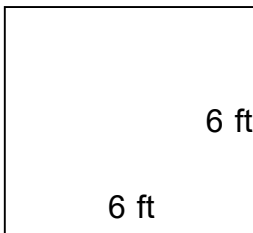
5.



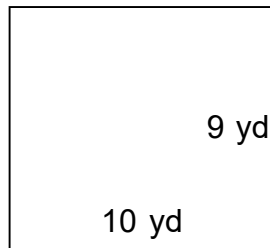
6.



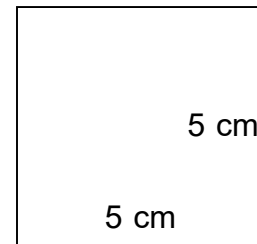
7.



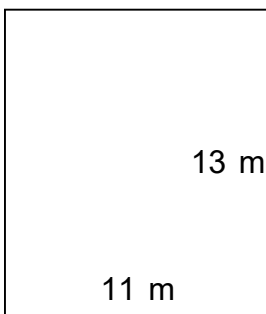
8.



9.



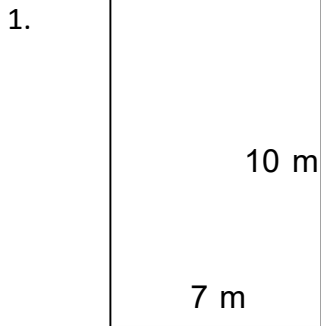
10.




Name: \_\_\_\_\_

# Area of Squares and Rectangles

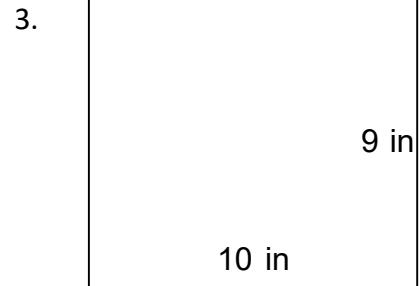
Find the area of the squares and rectangles. Answer using the correct units.



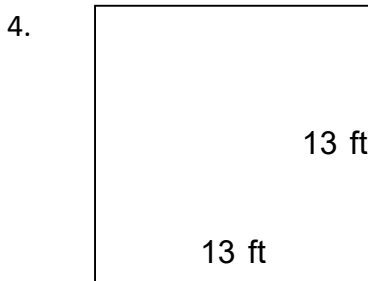
$A = 70 \text{ m}^2$



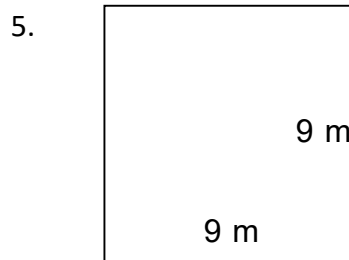
$A = 130 \text{ in}^2$



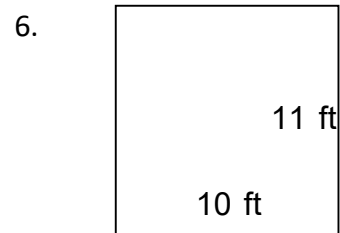
$A = 90 \text{ in}^2$



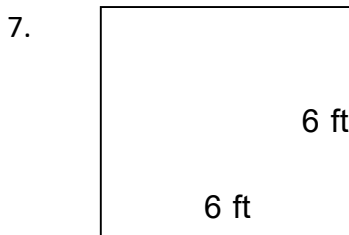
$A = 169 \text{ ft}^2$



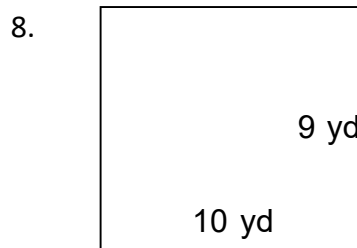
$A = 81 \text{ m}^2$



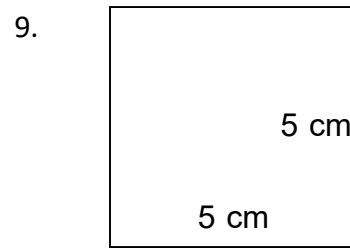
$A = 110 \text{ ft}^2$



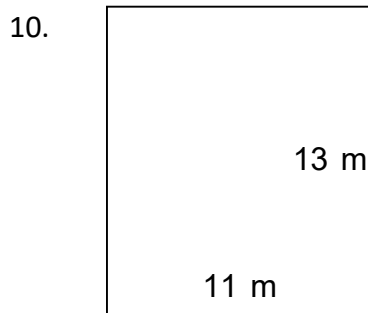
$A = 36 \text{ ft}^2$



$A = 90 \text{ yd}^2$



$A = 25 \text{ cm}^2$



$A = 143 \text{ m}^2$