


Name: _____

Time Passages: To the Minute

Worksheet 8


Draw the clock hands to show the passage of time.

1.




What time will it be in 1 hour 13 minutes?

2.




What time will it be in 5 hours 33 minutes?

3.



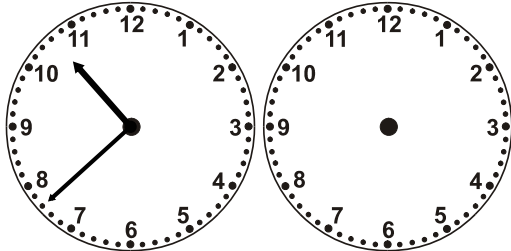
What time will it be in 2 hours 47 minutes?

4.




What time will it be in 5 hours 3 minutes?

5.



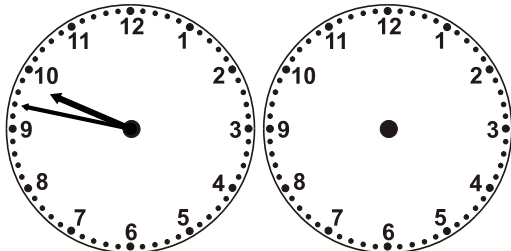
What time will it be in 6 hours 3 minutes?

6.




What time will it be in 3 hours 47 minutes?

7.




What time will it be in 8 hours 6 minutes?

8.



What time will it be in 2 hours 4 minutes?




Name: _____

Time Passages: To the Minute

Worksheet 8


Draw the clock hands to show the passage of time.

1.




What time will it be in 1 hour 13 minutes?

2.




What time will it be in 5 hours 33 minutes?

3.



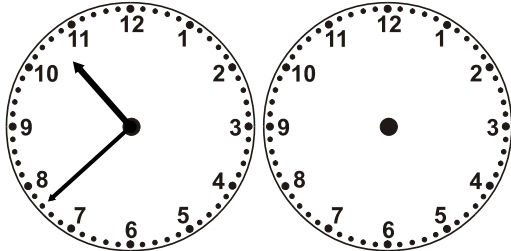
What time will it be in 2 hours 47 minutes?

4.




What time will it be in 5 hours 3 minutes?

5.



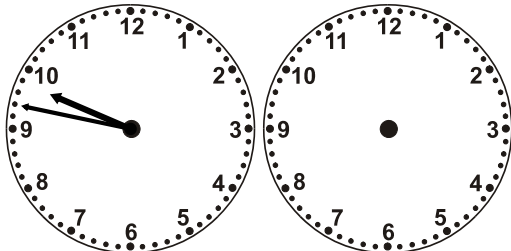
What time will it be in 6 hours 3 minutes?

6.




What time will it be in 3 hours 47 minutes?

7.



What time will it be in 8 hours 6 minutes?

8.



What time will it be in 2 hours 4 minutes?