



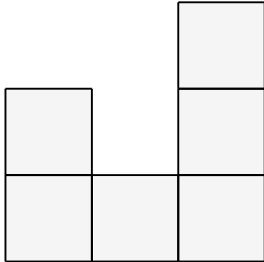
Name: _____

Perimeter and Area

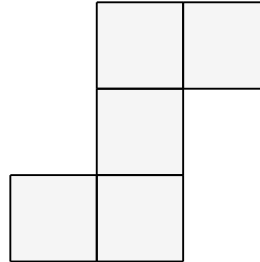
Perimeter is the the space around the shapes. Area is the space inside the shape.

Find the area AND perimeter of each shape.

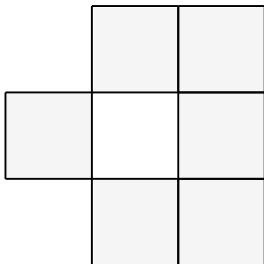
1.



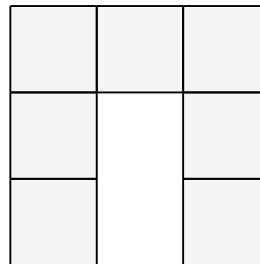
2.



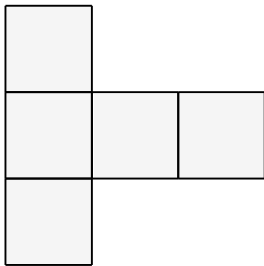
3.



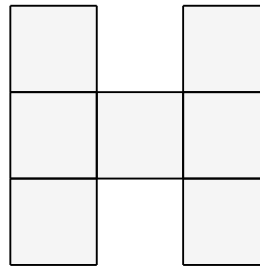
4.




5.



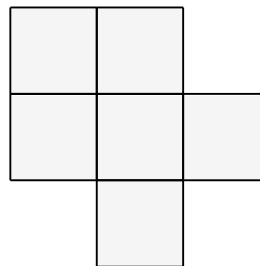
6.



7.



8.





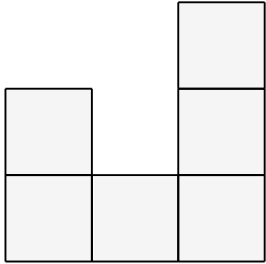
Name: _____

Perimeter and Area

Perimeter is the space around the shapes. Area is the space inside the shape.

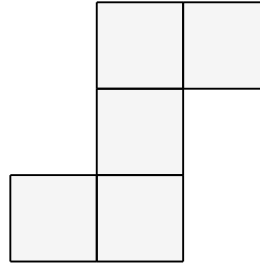
Find the area AND perimeter of each shape.

1.



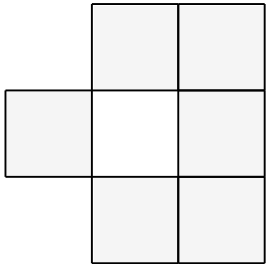
$P = 14 \text{ cm}$ $A = 6 \text{ cm}^2$

2.



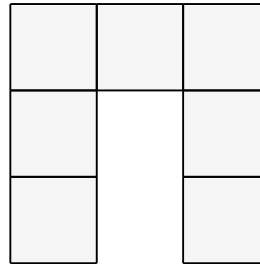
$P = 12 \text{ cm}$ $A = 5 \text{ cm}^2$

3.



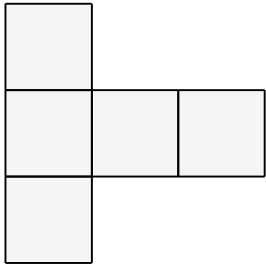
$P = 12 \text{ cm}$ $A = 6 \text{ cm}^2$

4.



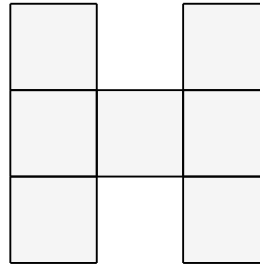
$P = 16 \text{ cm}$ $A = 7 \text{ cm}^2$

5.



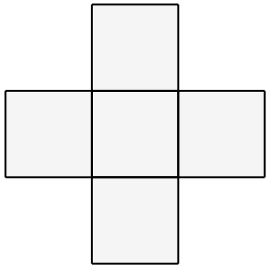
$P = 12 \text{ cm}$ $A = 5 \text{ cm}^2$

6.



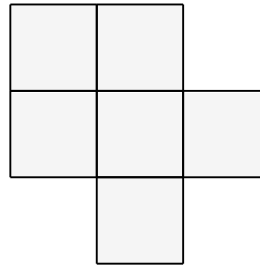
$P = 16 \text{ cm}$ $A = 7 \text{ cm}^2$

7.



$P = 12 \text{ cm}$ $A = 5 \text{ cm}^2$

8.



$P = 12 \text{ cm}$ $A = 6 \text{ cm}^2$